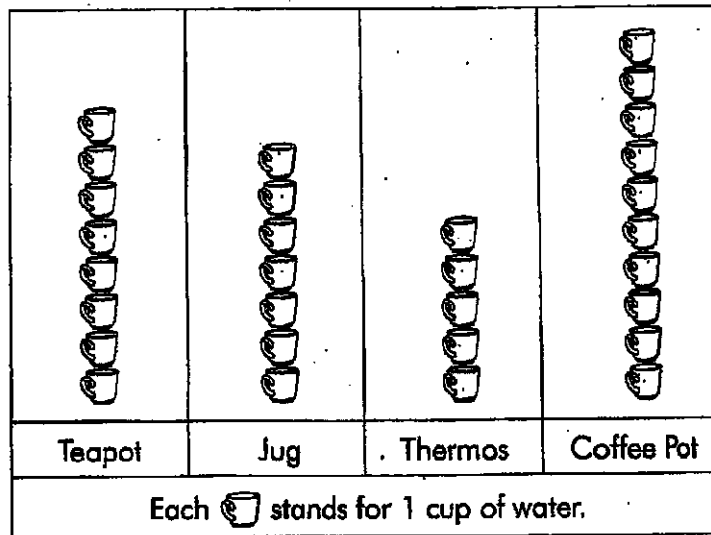


REVIEW 1

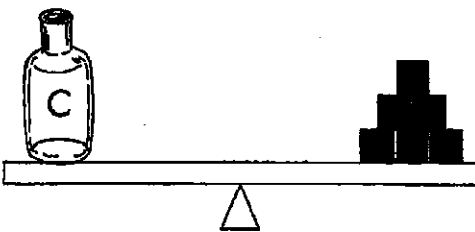
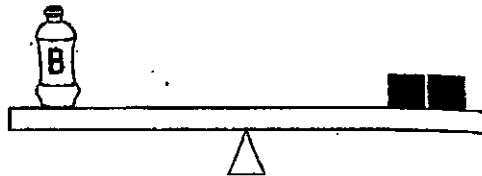
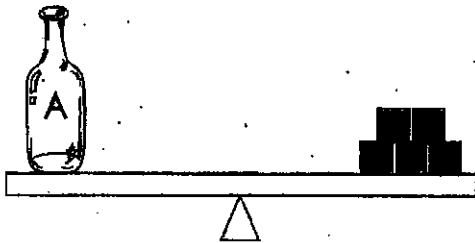
The picture graph below shows the number of cups of water each container can hold. Study the graph carefully. Fill in each blank with the correct answer.



- The teapot can hold _____ cups of water.
- The thermos can hold _____ cups of water.
- The container that can hold the fewest cups of water is the _____.
- The container that can hold the most cups of water is the _____.
- The teapot can hold _____ more cups of water than the thermos.
- The jug can hold _____ fewer cups of water than the coffee pot.


Fill in each blank with the correct answer.

Each ■ stands for 1 unit.



7. The mass of Bottle A is _____ units.
8. The mass of Bottle B is _____ units.
9. The mass of Bottle C is _____ units.
10. The mass of Bottle D is _____ units.
11. Bottle _____ is the heaviest.
12. Bottle _____ is the lightest.


13. The picture below shows a class of students at a park. Study the picture carefully. Draw a picture graph of the activities the students are doing.



Kite-Flying	Riding Bikes	Feeding Birds	Walking
Each ★ stands for 1 student.			

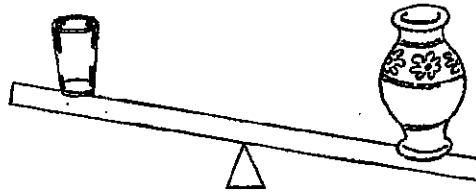
Fill in each blank with heavier than, lighter than, or as heavy as.

14.




The book is _____ the CDs.

15.



The glass is _____ the vase.

16.



The water bottle is _____ the telephone.

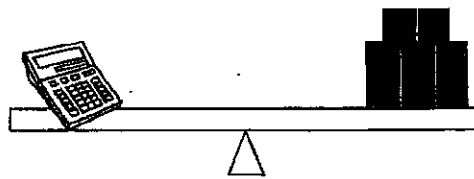
17.



The picture frame is _____ the box of tissues.

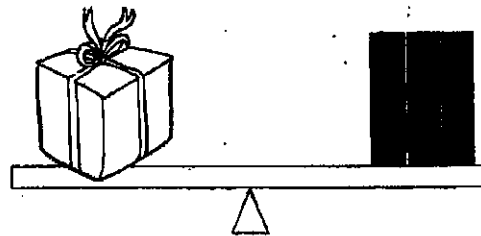
Fill in each blank with the correct answer. Each  stands for 1 unit.

18.



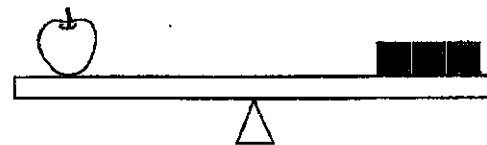
The mass of the calculator is _____ units.

19.



The mass of the present is _____ units.

20.



The mass of the apple is _____ units.

REVIEW 2

1. Write the numbers on the lines.

(a) twelve _____

(b) twenty-eight _____

(c) thirty-five _____

(d) eleven _____

(e) sixteen _____

2. Write the following numbers in words.

(a) 40 _____

(b) 29 _____

(c) 13 _____

(d) 38 _____

(e) 15 _____

Fill in each blank with the correct answer.

3. 5 less than 20 is _____.

6. 4 more than 15 is _____.


4. 1 more than 39 is _____.

7. 2 less than 17 is _____.

5. 3 less than 27 is _____.

Study the pictures. Fill in each blank with the correct answer.

8.



$$\underline{\quad} + \underline{\quad} + \underline{\quad} + \underline{\quad} + \underline{\quad} + \underline{\quad} = \underline{\quad}$$

$$6 \underline{\quad} = \underline{\quad}$$

9.



$$\underline{\quad} + \underline{\quad} + \underline{\quad} = \underline{\quad}$$

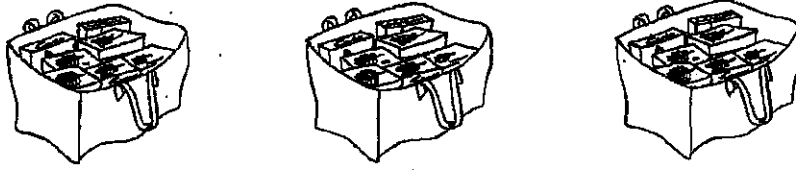
$$3 \underline{\quad} = \underline{\quad}$$

10. Fill in each blank with the correct answer.

16	28	19	25	31
----	----	----	----	----

- (a) The smallest number is _____.
- (b) The largest number is _____.
- (c) _____ is 3 more than 25.
- (d) _____ is 3 less than 22.
- (e) _____ is greater than 19 but smaller than 28.

19. Mom bought 3 bags of crackers. There were 7 packages of crackers in each bag. How many packages of crackers were there altogether?



$$\square \circ \square = \square$$

There were _____ packages of crackers altogether.

20. Madeline buys 8 bunches of bananas in a market. There are 4 bananas in each bunch. How many bananas are there altogether?




$$\square \circ \square = \square$$

There are _____ bananas altogether.


REVIEW 3

Write the correct time on the lines below.


1.




2.




3.




4.



5.




6.



Fill in each blank with the correct answer.


7.



Molly has 18 bars of chocolate. She gives equal numbers of chocolate bars to her 6 friends. Each friend receives _____ bars of chocolate.

Fill in the correct time on the lines below.


11.



Yoko goes to the library

at _____.

12.



Chris goes to school

at _____.

13.



Mom wakes up

at _____.

14.



Eli eats his lunch


at _____.

15.



Kaitlyn sleeps at _____.


16.



Anthony goes to the park


at _____.

19. Billy has 16 toy soldiers. He wants to put an equal number of toy soldiers into 2 boxes. How many toy soldiers are there in each box?



There are _____ toy soldiers in each box.

20. Alexandra buys 20 flowers. She places 4 flowers into each vase. How many vases does she need?



She needs _____ vases.

REVIEW 4

1. Fill in each blank with the correct answer.

36	79	56	64	59
----	----	----	----	----

- (a) The smallest number is _____.
- (b) The largest number is _____.
- (c) _____ is 3 more than 56.
- (d) _____ is 3 less than 59.
- (e) _____ is greater than 59 but smaller than 79.

Match the following amounts on the left to the correct totals on the right.

- | | |
|-------------------------------|--------|
| 2. 4 twenty-five-cent coins • | • \$25 |
| 3. 3 ten-cent coins • | • \$1 |
| 4. 2 ten-dollar bills • | • 30¢ |
| 5. 5 five-dollar bills • | • \$20 |
| 6. 6 ten-dollar bills • | • \$60 |

FINAL REVIEW

Fill in each blank with the correct answer.

1.



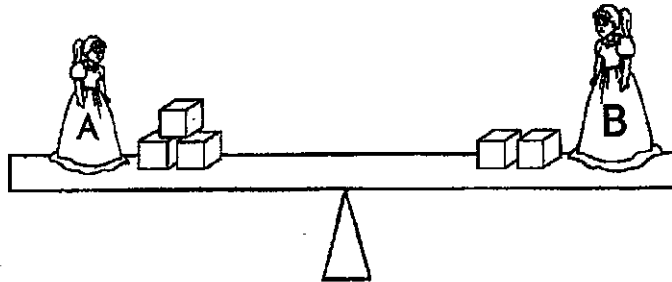
There are _____ fewer butterflies than flowers.

2. A fifty-cent coin can be exchanged for _____ ten-cent coins.

3. $3 + 3 + 3 + 3 + 3$ is the same as _____ threes.


Fill in the blanks with lighter than, heavier than, or as heavy as.

4.



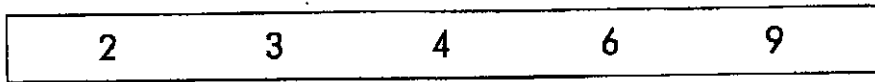
Doll A is _____ Doll B.

5.



Dad goes to work at _____
every morning.

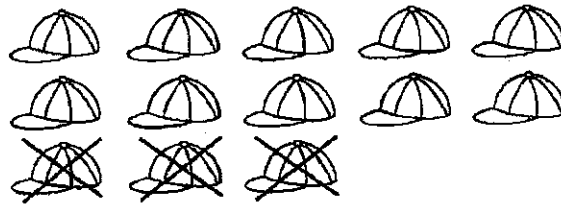
6. Use 3 numbers to complete the number sentence below. Use numbers from the box only ONCE.



_____ × _____ = _____


Study the pictures below. Write the correct number sentences.

7. (a)



_____ - _____ = _____

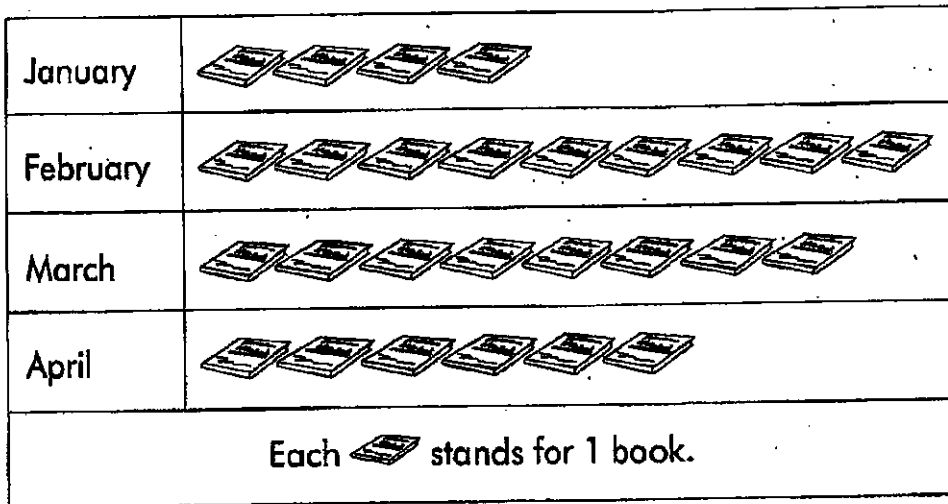
(b)



_____ + _____ = _____

The picture graph below shows the number of books Sadie read in 4 months. Study the picture graph. Answer the questions.

8.




- (a) Sadie read the most books in _____.
- (b) Sadie read the fewest books in _____.
- (c) Sadie read _____ more book(s) in February than in March.
- (d) Sadie read _____ fewer books in January than in April.
- (e) Sadie read _____ books altogether in 4 months.

Fill in each blank with the correct answer.

9. 10 less than 88 is _____.

10. Subtract 34 from 74 mentally. _____

11.

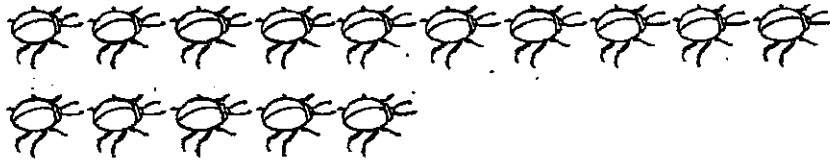


Joey has \$_____.

12. Amanda had 90¢. She bought a pair of scissors for 60¢.


She had _____¢ left.

13. There are 15 beetles. Circle the beetles in groups of 3.



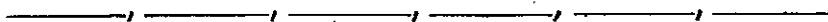
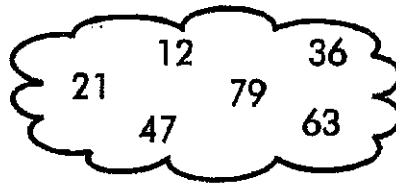
There are _____ groups of beetles.

14.

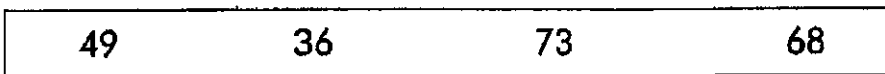


School ends at _____ today.

15. Arrange the numbers in order. Begin with the smallest.



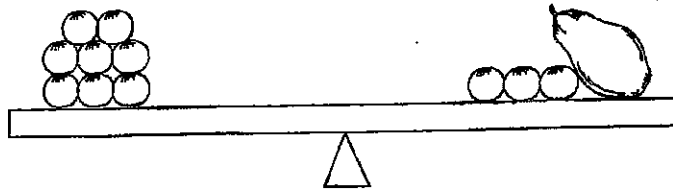
16.



(a) The smallest number is _____.


(b) The largest number is _____.

17.



The squash has the same mass as _____ oranges.

18.




Study the shapes above, and complete the picture graph below.

Triangle	
Square	
Circle	
Oval	
	Each ☆ stands for 1 shape.

Fill in the blanks with the correct answers.

19.



_____ tens _____ ones = _____

Solve the following story problems. Show your work.

20. Colby goes to the store with 45¢. A notebook costs 75¢. How much more money does he need?

$$\square \bigcirc \square = \square$$

He needs _____¢ more.

21. Mom puts 2 sandwiches in each box. How many sandwiches are there in 5 boxes?

$$\square \bigcirc \square = \square$$

There are _____ sandwiches in 5 boxes.

22. Shawn ate 4 crackers. There were still 18 crackers in the package. How many crackers were there in the beginning?

$$\square \ominus \square = \square$$

There were _____ crackers in the beginning.

23. Mrs. Terry bakes 20 muffins. If she packs 4 muffins into each box, how many boxes does she need?

She needs _____ boxes.

24. Bianca had 62 stickers. She gave some to her friends and had 22 stickers left. How many stickers did Bianca give to her friends?

$$\square \ominus \square = \square$$

She gave _____ stickers to her friends.

25. Eve has \$50. She buys a doll for \$38. How much change will she receive?

$$\square \ominus \square = \square$$

She will receive \$_____ in change.